








Maths Challenge Cards



Maths Challenge Cards

There are 16 fish swimming in the sea. The fish are yellow, red and green. 5 fish are red, 6 fish are green. How many are yellow?



Maths Challenge Cards

Octopus have 8 tentacles. How many tentacles are there altogether below?



Maths Challenge Cards

How many different ways can you find to do this?

$$4 = \square - \square$$

Maths Challenge Cards


The first anchor weighs 4kg, the second anchor weighs 7kg and the third anchor weighs 2kg. What's the total weight of all the anchors?



Maths Challenge Cards

Add together the numbers


2, 3, 4, 6, 7, 8, 10



What is the total?
Can you find a quick way to do this?

Maths Challenge Cards

What happens when you add an even number and an odd number together?



Does this always happen?
Why does this happen?

Maths Challenge Cards

Lauren, Claire and Shantal are scuba diving. They each have different coloured hair. The different colours are brown, blonde and ginger.



Claire is on the right and has brown hair. Shantal is on the left and doesn't have ginger hair. Where is Lauren and what colour is her hair?

Maths Challenge Cards

Choose 2 even numbers and add them together.
What do you notice?

Try this with different even numbers.

2 4 6 8 10 12




Does this always happen?

Why does this happen?

Maths Challenge Cards

The shark has 6 more teeth than the swordfish. The swordfish has 12 teeth. How many teeth does the shark have?



Maths Challenge Cards

Find 2 numbers next to each other that add up to 25.



Maths Challenge Cards

Choose 2 odd numbers and add them together.
What do you notice?

Try this with different odd numbers.

3 5 7 9 11

Does this always happen?

Why does this happen?